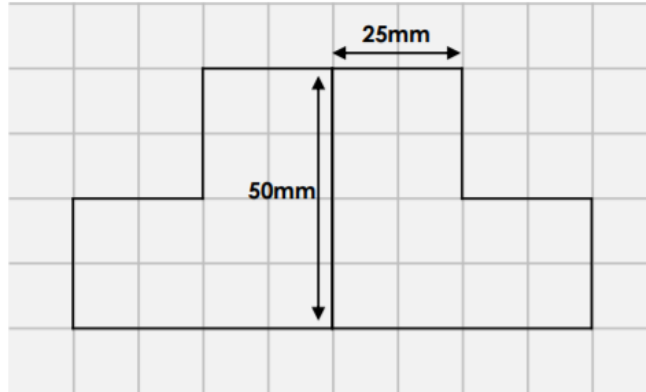


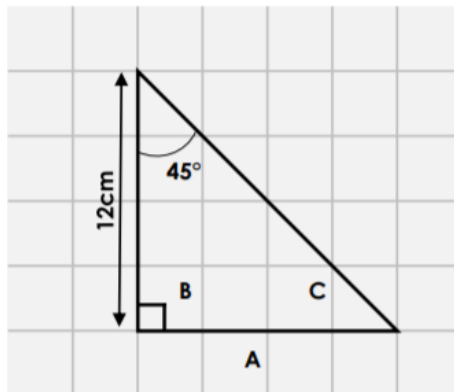
TASK 2.3

4. Calculate the perimeter of the shape.



VF
HW/Ext

5. Calculate the length of the side A and the angles B and C in the shape below.



Side

A = _____

Angle

B = _____

C = _____



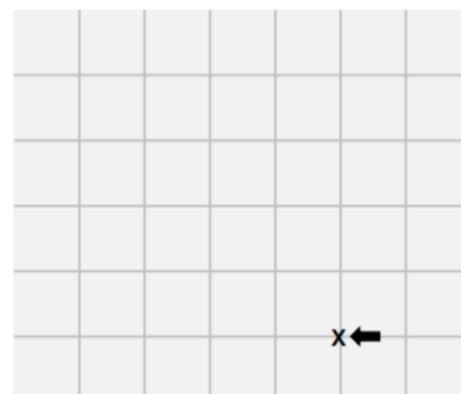
VF
HW/Ext

6. Starting on X, follow Ellie's instructions and draw her walking route around the park.



Ellie

Move forward four squares.
Turn 90° clockwise.
Move forward four squares.
Turn 135° clockwise.
Move diagonally through four squares.



Name the shape you have drawn.



RPS
HW/Ext

TASK 2.3