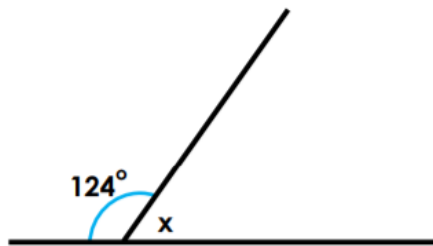
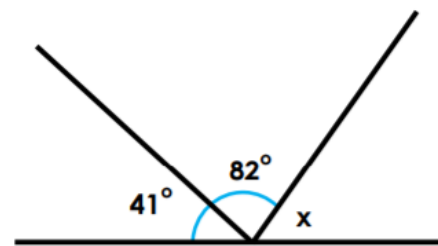


4. True or false? Both missing angles marked x are 57° .

A.



B.

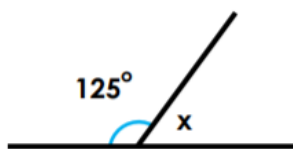


Angles not drawn to scale

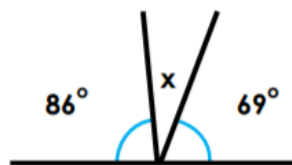
VF
HW/Ext

5. Which line has a missing angle of 22° ?

A.



B.



C.



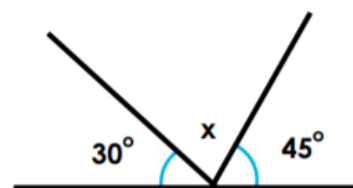
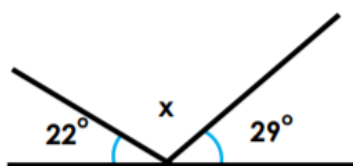
Angles not drawn to scale

VF
HW/Ext

6. Florence thinks that her missing angle is bigger than Freya's.



Florence



Freya

Is she correct? Explain your answer.



Angles not drawn to scale

RPS
HW/Ext